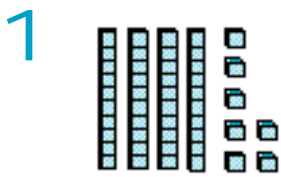
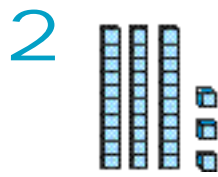


Let's Count!

How many tens or ones?




4 tens + ones



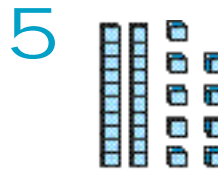
3 tens + ones




ten + 0 ones



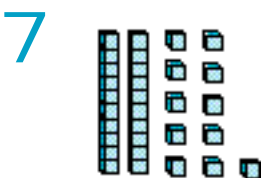
tens + 6 ones




2 tens + ones



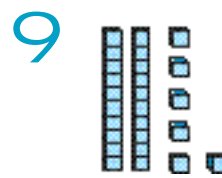
6 tens + ones



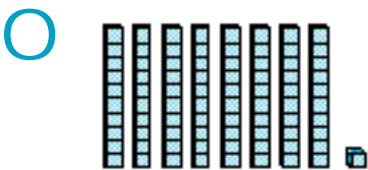
2 tens + ones



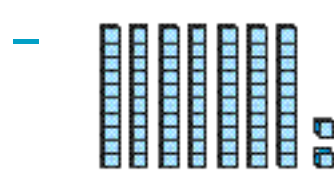
tens + 9 ones



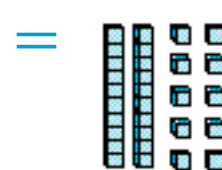
2 tens + ones



tens + 1 one



7 tens + ones



2 tens + ones

Answer Box

A 2	B 9	C 11	D 8	E 4	F 10
G 1	H 6	I 5	J 7	K 0	L 3

