




# Mental Arithmetic—Coins

Use only the following coins in answering each question.



What is the smallest number of coins you could use to make each of the following money amounts?

- 1 \$1.25
- 2 35¢
- 3 \$1.50
- 4 \$8.75
- 5 \$2.02
- 6 52¢
- 7 \$5.05
- 8 \$2.16
- 9 \$1.66
- 10 \$100
- 11 \$9.00
- 12 \$11.11



## Answer Box

|    |    |    |    |     |    |
|----|----|----|----|-----|----|
| A  | B  | C  | D  | E   | F  |
| 11 | 46 | 6  | 9  | 400 | 21 |
| G  | H  | I  | J  | K   | L  |
| 4  | 2  | 10 | 36 | 35  | 5  |

